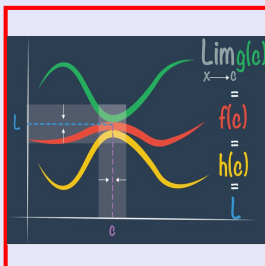


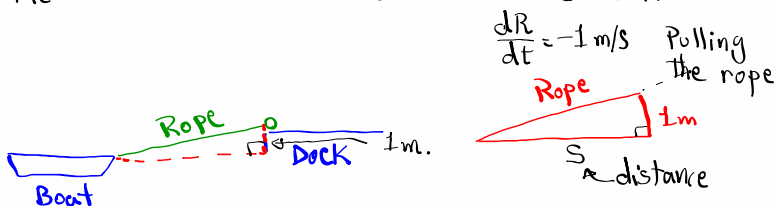
Calculus I

Lecture 31



Feb 19-8:47 AM

A boat is pulled into a dock by a rope attached to the boat, and it is going through a pulley on the dock that is 1 m above the boat.



If the rope is pulled in at 1 m/s , how fast is the boat approaching the dock when it is 8 m from the dock.

$$s^2 + 1^2 = R^2$$

$$2s \frac{ds}{dt} + 0 = 2R \frac{dR}{dt}$$

Solve $\frac{ds}{dt} = ?$

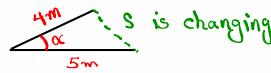
$$s^2 + 1^2 = R^2$$

$$8^2 + 1 = R^2 \rightarrow R =$$

$\frac{dR}{dt} = -1\text{ m/s}$ Pulling the rope

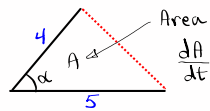
Apr 9-8:47 AM

Two sides of a triangle are 4m and 5m.



The angle between them is increasing at the rate of 0.06 rad/s .

At what rate is the area of the triangle changing when the angle between the two given side is 60° ?



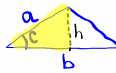
$$\text{Area} = \frac{1}{2} \cdot 4 \cdot 5 \cdot \sin \alpha$$

$$A = 10 \sin \alpha$$

$$\frac{dA}{dt} = 10 \cdot \cos \alpha \cdot \frac{d\alpha}{dt}$$

$$\frac{dA}{dt} = 10 \cdot \cos 60^\circ \cdot (0.06)$$

$$= 0.6 \cdot \frac{1}{2} = 0.3 \text{ m}^2/\text{s}$$



$$A = \frac{1}{2} b h$$

$$\sin C = \frac{h}{a} \rightarrow h = a \sin C$$

$$A = \frac{1}{2} a b \sin C$$

How can we find area of a triangle when two sides and the angle between them is given.

unit

Apr 9-8:56 AM

How to find abs. Max & abs. Min values of a cont. function $f(x)$ on $[a, b]$:

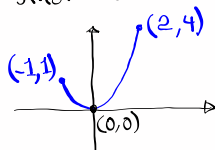
1) Always verify that $f(x)$ is cont. on $[a, b]$.

2) Find $f(a)$ & $f(b)$ $\rightarrow S'(x)=0$ or undefined

3) Find all critical points in (a, b) .

4) Abs. Max & Abs. Min. are the largest and smallest values from steps 2 & 3.

find abs. Max & abs. Min for $f(x)=x^2$ over $[-1, 2]$



Abs. Max is 4
Abs. Min is 0

$f(x)=x^2$ is a polynomial and it is cont. everywhere.

$$f(-1) = (-1)^2 = 1, f(2) = 2^2 = 4$$

$$f'(x) = 2x \quad 2x = 0 \quad x = 0$$

\uparrow
C.N.

$$f(0) = 0$$

$(0, 0)$
 \uparrow
C.P.

Apr 9-9:08 AM

$$f(x) = 2x^3 - 54x - 5, [0, 4]$$

Find Abs. max. and abs. min.

$f(x)$ is a Polynomial function \Rightarrow Cont. everywhere

$$f(0) = -5, f(4) = 93 \quad \text{C.N.}$$

$$f'(x) = 6x^2 - 54 \quad f'(x) = 0 \quad 6x^2 - 54 = 0$$

$$x^2 - 9 = 0 \rightarrow x = \pm 3$$

-3 is not in $(0, 4)$, 3 is in $(0, 4)$

$$f(3) = -113 \quad (3, -113) \quad \text{C.P.}$$

Abs. Max is -5

Abs. Min is -113

Apr 9-9:19 AM

$$f(x) = 2\cos x + \sin 2x, [0, \frac{\pi}{2}]$$

$f(x)$ is cont. everywhere

$$f(0) = 2\cos 0 + \sin 2(0) = 2 \cdot 1 + 0 = 2$$

$$f(\frac{\pi}{2}) = 2\cos \frac{\pi}{2} + \sin 2(\frac{\pi}{2}) = 2 \cdot 0 + 0 = 0$$

$$f'(x) = -2\sin x + \cos 2x \cdot 2$$

$$f'(x) = 0 \quad -2\sin x + 2\cos 2x = 0$$

Recall from Trig: $-\sin x + \cos 2x = 0$

$$\cos 2x = \cos^2 x - \sin^2 x \quad -\sin x + 1 - 2\sin^2 x = 0$$

$$\cos 2x = 2\cos^2 x - 1 \quad -2\sin^2 x - \sin x + 1 = 0$$

$$\cos 2x = 1 - 2\sin^2 x \quad 2\sin^2 x + \sin x - 1 = 0$$

$$f(\frac{\pi}{6}) = 2\cos \frac{\pi}{6} + \sin 2(\frac{\pi}{6})$$

$$= 2 \cdot \frac{\sqrt{3}}{2} + \frac{\sqrt{3}}{2}$$

$$= \frac{3\sqrt{3}}{2} \approx 2.598$$

$$(2\sin x - 1)(\sin x + 1) = 0$$

$$2\sin x - 1 = 0 \quad \text{OR} \quad \sin x + 1 = 0$$

$$\sin x = \frac{1}{2}$$

$$\sin x = -1$$

C.N. $\rightarrow x = \frac{\pi}{6}$ is in $(0, \frac{\pi}{2})$ $\rightarrow \frac{3\pi}{2}$ Not in $(0, \frac{\pi}{2})$

Abs. Max $\frac{3\sqrt{3}}{2}$

Abs. Min 0

Apr 9-9:27 AM

Find all critical points for $f(x) = \sqrt[4]{x^3} - 2\sqrt[4]{x}$.

$f'(x) = 0$ or undefined

$f(x) = x^{\frac{3}{4}} - 2x^{\frac{1}{4}}$ even index,
Radical ≥ 0

$f'(x) = \frac{3}{4} \cdot x^{\frac{3}{4}-1} - 2 \cdot \frac{1}{4} x^{\frac{1}{4}-1}$ $x^3 \geq 0$
 $x \geq 0$

$= \frac{3}{4} x^{-\frac{1}{4}} - \frac{2}{4} x^{-\frac{3}{4}}$ Domain
 $[0, \infty)$

$f'(x) = 0 \quad \frac{3}{4} x^{-\frac{1}{4}} - \frac{2}{4} x^{-\frac{3}{4}} = 0$

$\frac{1}{4} x^{-\frac{3}{4}} (3x^1 - 2) = 0$ C.N.

$f'(x) = \frac{3x - 2}{4\sqrt[4]{x^3}}$ $f'(x) = 0 \rightarrow 3x - 2 = 0 \rightarrow \boxed{x = \frac{2}{3}}$

$f'(x)$ is undefined $\rightarrow 4\sqrt[4]{x^3} = 0 \rightarrow \boxed{x = 0}$

Critical Points

$f\left(\frac{2}{3}\right) = \sqrt[4]{\left(\frac{2}{3}\right)^3} - 2\sqrt[4]{\frac{2}{3}} \approx \boxed{} \left(\frac{2}{3}, \right)$ C.P.

$f(0) = \sqrt[4]{0^3} - 2\sqrt[4]{0} = \boxed{0} \quad (0, 0)$

Google Rolle's Theorem and Mean Value Theorem

Apr 9-9:42 AM